



INDIAN SCHOOL AL WADI AL KABIR

DEPARTMENT OF MATHEMATICS (2024-2025)

TOPIC: HANDLING DATA

WORKSHEET




























RESOURCE PERSON: MS. MIDHAT FATIMA

NAME: _____ CLASS: III SEC: _____ DATE: _____

Read the instructions and do as directed.

Q1. The Peppa Pie Shop sells a range of different pies. Given below is the number of pies sold in a week. Study the following pictograph and provide answers for the questions given below.

Each  represents 20 pies.

Monday							
Tuesday							
Wednesday							
Thursday							
Friday							
Saturday							

1. How many pies do  represent? _____

2. How many pies were sold on Friday? _____

3. On which day was the most number of pies sold? _____

How many pies were sold that day? _____

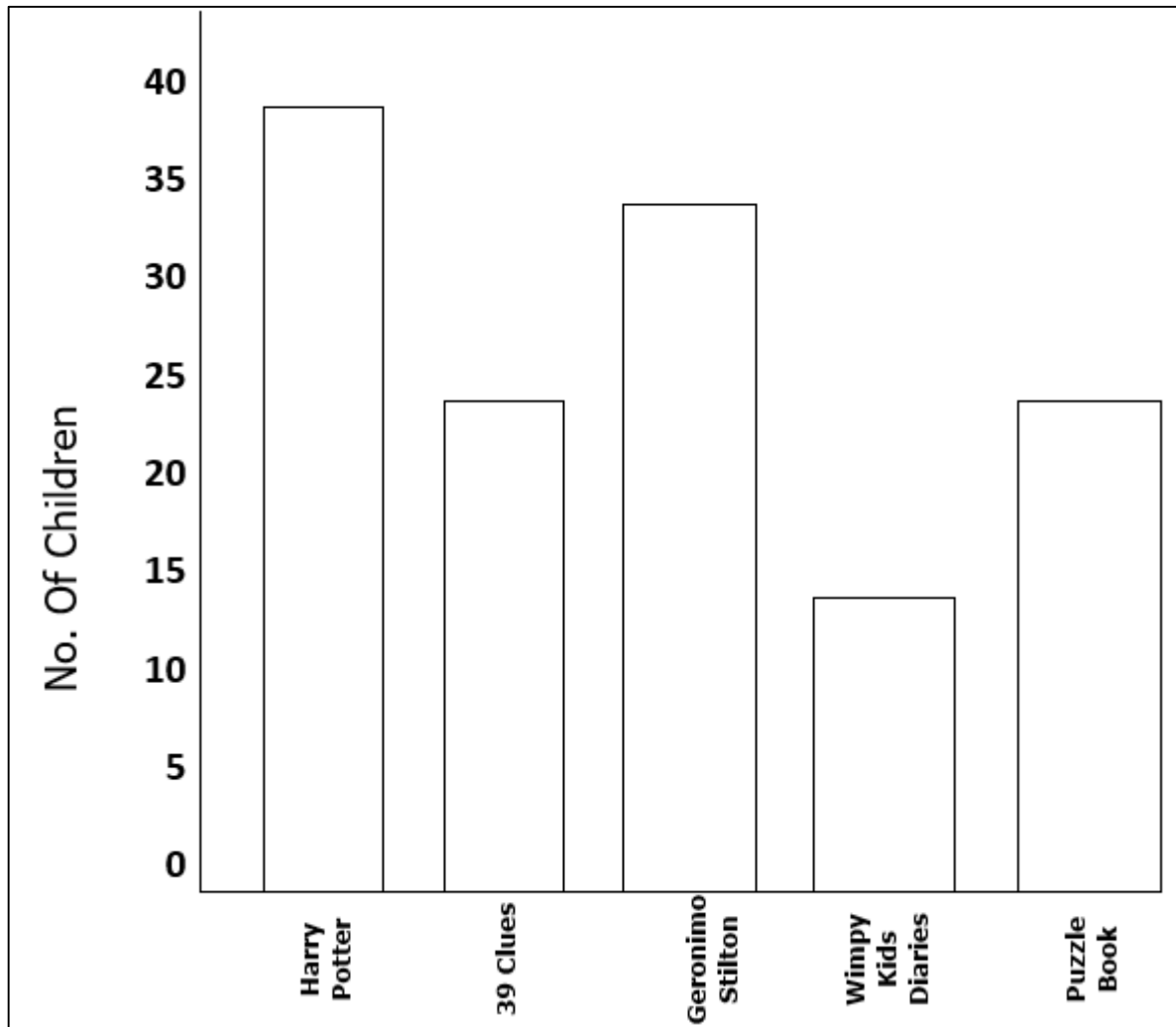
4. On which day was the least number of pies sold? _____

5. How many more pies were sold on Tuesday than on Monday? _____

6. How many pies were sold in total that week?

_____ + _____ + _____ + _____ + _____ + _____ = _____

QII. Data on the favourite book series of some of the Class III students is given below in the bar graph. Fill the bars using different colours. Study the graph carefully and answer the questions that follow.



(Objective: Integrating with English)

1. Which book is the least liked by the students? _____
2. How many more children liked to read Harry Potter than Geronimo Stilton?

3. Which two books are equally popular for reading?

4. The maximum number of children liked to read _____.
5. Give a suitable title to the above bar graph.
